

Name: \_\_\_\_\_

Mr. Reuter

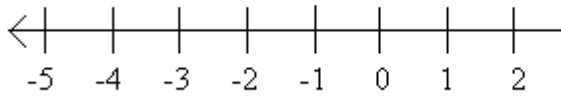
Class: Math 6-\_\_\_\_\_

Date: 1/30/17

### Homework –Inequalities

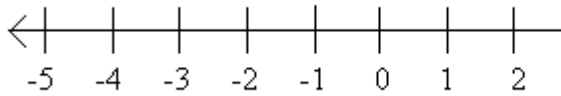
Graph for 1-6 and write 7-12 as an inequality.

1.  $x < 1$



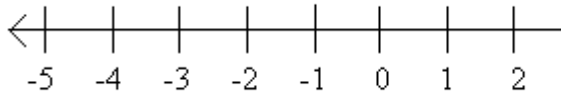
7.  $k$  is less than 10.

2.  $y > -1$



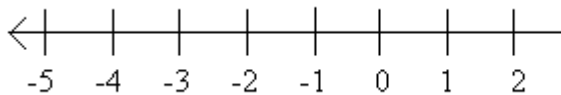
8.  $f$  is greater than -9.

3.  $z < -3$



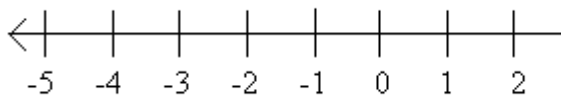
9.  $d$  is greater than 7.

4.  $k > 2$



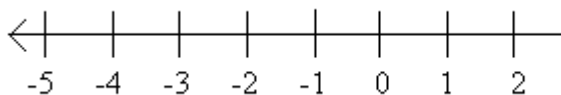
10.  $p$  is less than -6.

5.  $r + 1 < -4$



11.  $q$  plus 2 is less than 5.

6.  $d + 2 > 5$



12.  $e$  minus 3 is greater than 5.