

Name: _____

Mr. Reuter

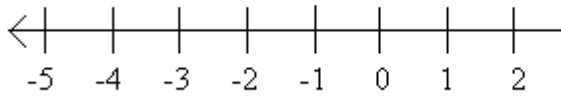
Class: Math 6-_____

Date: 1/31/17

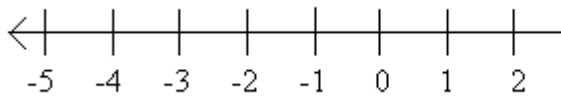
Homework –Inequalities 2

Graph for 1-6 and write 7-12 as an inequality.

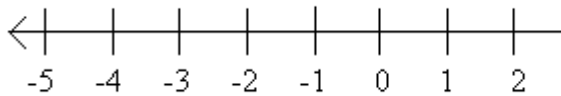
1. $c \leq 2$



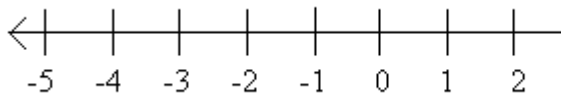
2. $u > -2$



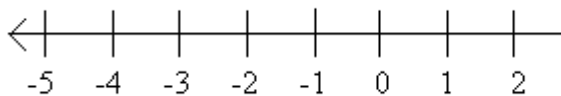
3. $x \leq -4$



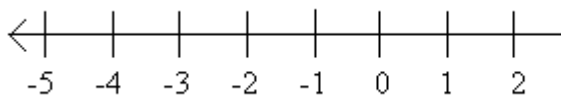
4. $z > 3$



5. $t - 2 < 5$



6. $f + 1 \geq 4$



7. v is less than or equal to 12.

8. h is greater than -7.

9. g is greater than or equal to 5.

10. a is less than or equal to -4.

11. w plus 4 is greater than 6.

12. r minus 6 is less than or equal to 8.